



Train Times

Here are the approximate train times from Liverpool to different towns and cities:

1) Fill in the journey length column.

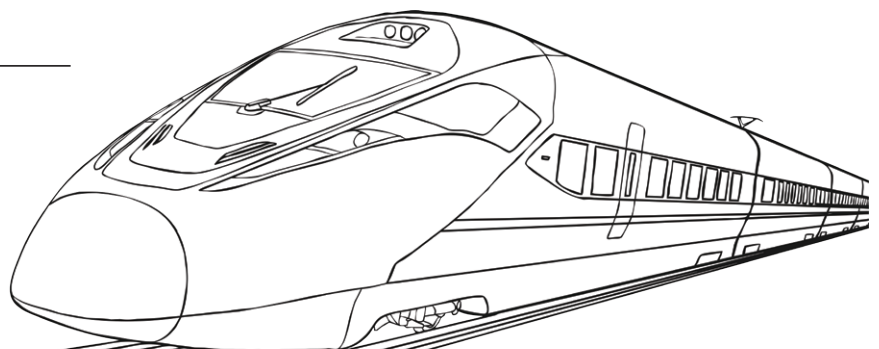
From	To	Leave	Arrive	Journey length
Liverpool	London	8:45 a.m.	11:05 a.m.	
Liverpool	Sheffield	8:50 a.m.	10:35 a.m.	
Liverpool	Birmingham	9:05 a.m.	10:45 a.m.	
Liverpool	Bristol	8:45 a.m.	12:05 p.m.	
Liverpool	York	8:20 a.m.	10:35 a.m.	
Liverpool	Dundee	9:20 a.m.	3:45 p.m.	
Liverpool	Southampton	8:35 a.m.	1:15 p.m.	
Liverpool	Nottingham	8:50 a.m.	11:30 a.m.	

2) Work out the difference in journey times, in minutes, between:

a) Liverpool to London and Liverpool to York.

b) Liverpool to Southampton and Liverpool to Bristol.

c) Liverpool to Birmingham and Liverpool to Nottingham.





Train Times Answers

Question	Answer				
1. Fill in the journey length column.					
	Liverpool	London	8:45 a.m.	11:05 a.m.	2 hours 20 minutes
	Liverpool	Sheffield	8:50 a.m.	10:35 a.m.	1 hour 45 minutes
	Liverpool	Birmingham	9:05 a.m.	10:45 a.m.	1 hour 40 minutes
	Liverpool	Bristol	8:45 a.m.	12:05 p.m.	3 hours 20 minutes
	Liverpool	York	8:20 a.m.	10:35 a.m.	2 hours 15 minutes
	Liverpool	Dundee	9:20 a.m.	3:45 p.m.	6 hours 25 minutes
	Liverpool	Southampton	8:35 a.m.	1:15 p.m.	4 hours 40 minutes
	Liverpool	Nottingham	8:50 a.m.	11:30 a.m.	2 hours 40 minutes
2. Work out the difference in journey times, in minutes, between:					
a.	Liverpool to London and Liverpool to York. 5 minutes				
b.	Liverpool to Southampton and Liverpool to Bristol. 80 minutes				
c.	Liverpool to Birmingham and Liverpool to Nottingham. 60 minutes				




Train Times

Here are the approximate train times from Birmingham to different towns and cities:

From	To	Journey length
Birmingham	Manchester	1 hour 30 minutes
Birmingham	Cardiff	2 hours
Birmingham	Edinburgh	5 hours
Birmingham	Bristol	1 hour 25 minutes
Birmingham	Newcastle	3 hours 15 minutes
Birmingham	York	2 hours 10 minutes
Birmingham	Plymouth	3 hours 30 minutes
Birmingham	London	1 hour 40 minutes

1) Order the train journeys from shortest to longest:


- a) _____
- b) _____
- c) _____
- d) _____
- e) _____
- f) _____
- g) _____
- h) _____





2) Use the correct symbol (< or >) to compare these journeys:

Birmingham to Bristol		Birmingham to York
Birmingham to London		Birmingham to Manchester
Birmingham to Plymouth		Birmingham to Edinburgh
Birmingham to Cardiff		Birmingham to Newcastle
Birmingham to Manchester		Birmingham to Bristol





Train Times Answers

Question	Answer
1. Order the train journeys from shortest to longest:	
a.	<i>Birmingham to Bristol</i>
b.	<i>Birmingham to Manchester</i>
c.	<i>Birmingham to London</i>
d.	<i>Birmingham to Cardiff</i>
e.	<i>Birmingham to York</i>
f.	<i>Birmingham to Newcastle</i>
g.	<i>Birmingham to Plymouth</i>
h.	<i>Birmingham to Edinburgh</i>

2. Use the correct symbol (< or >) to compare these journeys:

Birmingham to Bristol	<	Birmingham to York
Birmingham to London	>	Birmingham to Manchester
Birmingham to Plymouth	<	Birmingham to Edinburgh
Birmingham to Cardiff	<	Birmingham to Newcastle
Birmingham to Manchester	>	Birmingham to Bristol



Train Times

Here are the approximate train times from Sheffield to different towns and cities:

1) Fill in the journey length column.

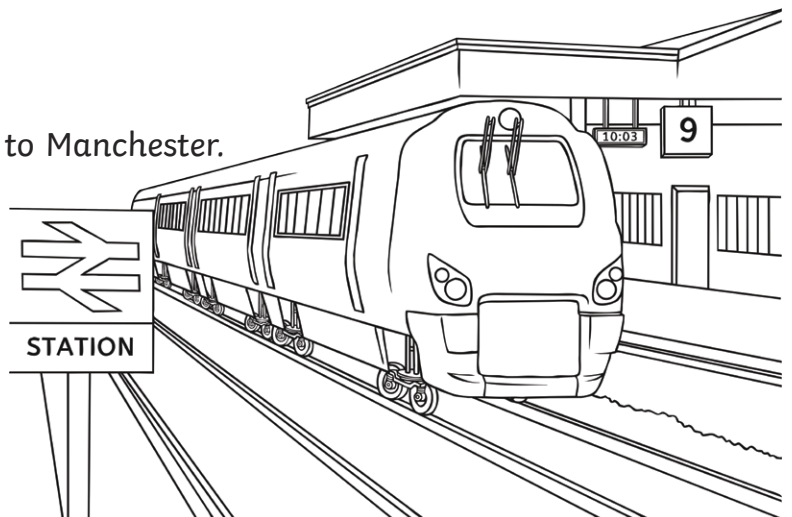
From	To	Leave	Arrive	Journey length
Sheffield	London	8:30 a.m.	10:50 a.m.	
Sheffield	Plymouth	7:50 a.m.	12:50 p.m.	
Sheffield	Manchester	8:40 a.m.	9:30 a.m.	
Sheffield	Norwich	8:40 a.m.	12:10 p.m.	
Sheffield	Exeter	8:50 a.m.	12:40 p.m.	
Sheffield	York	8:20 a.m.	9:30 a.m.	
Sheffield	Newcastle	8:20 a.m.	10:30 a.m.	
Sheffield	Glasgow	8:40 a.m.	1:00 p.m.	

2) Work out the difference in journey times, in minutes, between:

a) Sheffield to London and Sheffield to Norwich.

b) Sheffield to Norwich and Sheffield to Exeter.

c) Sheffield to Newcastle and Sheffield to Manchester.





Train Times Answers

Question	Answer				
1. Fill in the journey length column.					
	Sheffield	London	8:30 a.m.	10:50 a.m.	2 hours 20 minutes
	Sheffield	Plymouth	7:50 a.m.	12:50 p.m.	5 hours
	Sheffield	Manchester	8:40 a.m.	9:30 a.m.	50 minutes
	Sheffield	Norwich	8:40 a.m.	12:10 p.m.	3 hours 30 minutes
	Sheffield	Exeter	8:50 a.m.	12:40 p.m.	3 hours 50 minutes
	Sheffield	York	8:20 a.m.	9:30 a.m.	1 hour 10 minutes
	Sheffield	Newcastle	8:20 a.m.	10:30 a.m.	2 hours 10 minutes
	Sheffield	Glasgow	8:40 a.m.	1:00 p.m.	4 hours 20 minutes
2. Work out the difference in journey times, in minutes, between:					
a.	Sheffield to London and Sheffield to Norwich. 70 minutes				
b.	Sheffield to Norwich and Sheffield to Exeter. 20 minutes				
c.	Sheffield to Newcastle and Sheffield to Manchester. 80 minutes				